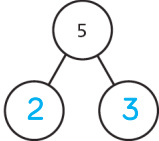
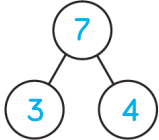
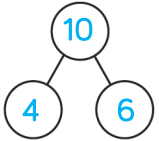
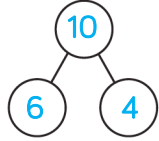
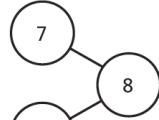

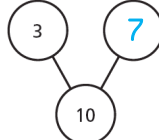
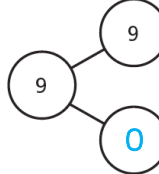


Question	Answer
1	<p>a)  <math>5 - 2 = 3</math></p> <p>b)  <math>7 - 3 = 4</math></p>
2	<p> <math>10 - 4 = 6</math></p> <p>the number of red shapes</p> <p> <math>10 - 6 = 4</math></p>
3	<p>a)  <math>8 - 7 = 1</math></p> <p></p> <p>b)  <math>10 - 3 = 7</math></p> <p>c)  <math>9 - 9 = 0</math></p>